

Centre Number						Candidate Number				
Surname										
Other Names										
Candidate Signature										

For Examiner's Use	
Examiner's Initials	
Pages	Mark
3	
4–5	
6–7	
8–9	
10–11	
12–13	
14–15	
16–17	
18–19	
20–21	
22–23	
24–25	
26–27	
TOTAL	



General Certificate of Secondary Education
Foundation Tier
November 2012

Mathematics (Linear)

43652F

Paper 2

Monday 12 November 2012 9.00 am to 10.45 am

F

For this paper you must have:

- a calculator
- mathematical instruments.



Time allowed

- 1 hour 45 minutes

Instructions

- Use black ink or black ball-point pen. Draw diagrams in pencil.
- Fill in the boxes at the top of this page.
- Answer **all** questions.
- You must answer the questions in the spaces provided. Do not write outside the box around each page or on blank pages.
- Do all rough work in this book.

Information

- The marks for questions are shown in brackets.
- The maximum mark for this paper is 105.
- The quality of your written communication is specifically assessed in Questions 15, 16 and 27. These questions are indicated with an asterisk (*).
- You may ask for more answer paper, tracing paper and graph paper. These must be tagged securely to this answer book.

Advice

- In all calculations, show clearly how you work out your answer.



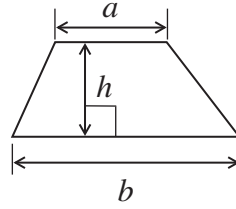
N 0 V 1 2 4 3 6 5 2 F 0 1

WMP/Nov12/43652F

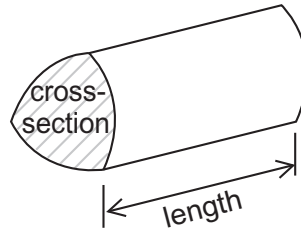
43652F

Formulae Sheet: Foundation Tier

Area of trapezium = $\frac{1}{2}(a+b)h$




Volume of prism = area of cross-section \times length



Answer **all** questions in the spaces provided.

1 Work out the shaded area on the centimetre grid.



State the units of your answer.

.....

.....

.....

Answer (3 marks)



2 (a) Write 23 450 to the nearest thousand.

Answer (1 mark)


2 (b) Write down **all** the **two-digit** numbers that can be made using the digits 1, 5 and 7.
Each digit can be repeated.

Answer

..... (3 marks)



3 (a) Measure the radius of this circle in centimetres.



Answer cm (1 mark)

3 (b) Measure or work out the diameter of the circle in centimetres.

.....

Answer cm (1 mark)

3 (c) Write down a formula in words connecting the diameter and the radius.

.....

(1 mark)

Turn over for the next question



4 The episodes of a TV soap are each 50 minutes long.
Ryan watches three episodes together.

How long is he watching TV?
Give your answer in hours and minutes.

.....
.....
.....

Answer hours minutes (2 marks)

5 30 students were asked to draw a circle or a square and to colour it in.
Here are the results.

	Red	Blue	Green
Circle	4	8	7
Square	6	3	2

5 (a) How many **blue circles** were drawn?

Answer (1 mark)

5 (b) How many **squares** were drawn altogether?

.....

Answer (1 mark)



6 (a) 44% of the students in a school are boys.

What percentage are girls?

.....

Answer % (1 mark)

6 (b) A bottle is full of water.

30% of the water is poured out.
Half of the remaining water is then poured out.

What percentage of the bottle is now filled with water?

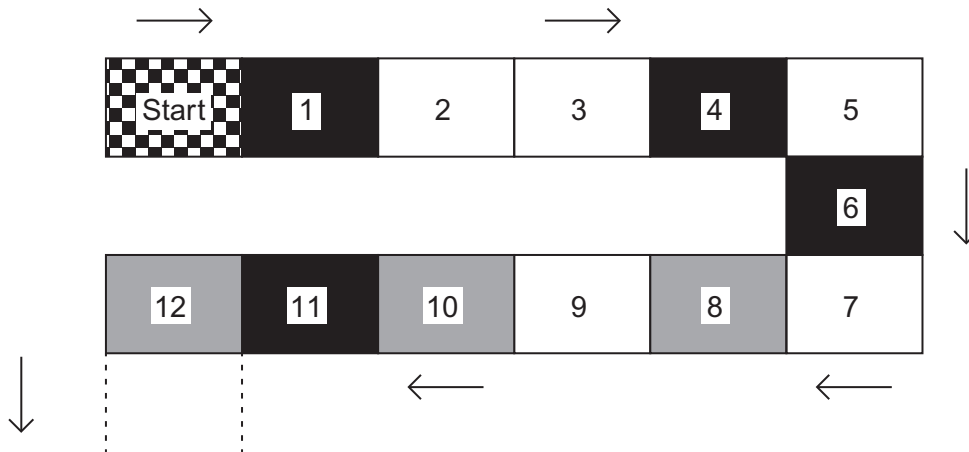
.....
.....
.....
.....
.....

Answer % (3 marks)

Turn over for the next question



- 7 The diagram shows the first part of a board game.



Roll an ordinary, fair six-sided dice.

From the start, move the number of places shown by the dice.

- 7 (a) Circle the word that describes the chance of landing on **black** on your first move.

Impossible Unlikely Evens Likely Certain

(1 mark)

- 7 (b) Circle the word that describes the chance of landing on **grey** on your first move.

Impossible Unlikely Evens Likely Certain

(1 mark)



- 7 (c)** Beth starts the game.
She lands on black on both of her first two moves.

Write down **two** possible pairs of numbers she could have rolled.

First roll Second roll.....

First roll Second roll.....

(2 marks)

- 8 (a)** Use your calculator to work out the **two** numbers in the list that are multiples of 7.

Circle your answers.

651

787

489

602

414

(2 marks)

- 8 (b)** Use your calculator to work out the **two** numbers in the list that are factors of 1001.

Circle your answers.

3

7

9

11

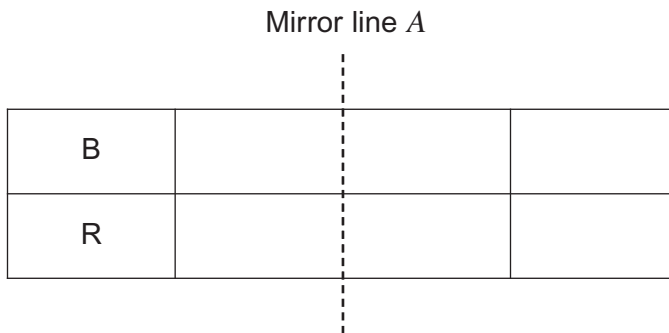
17

(2 marks)



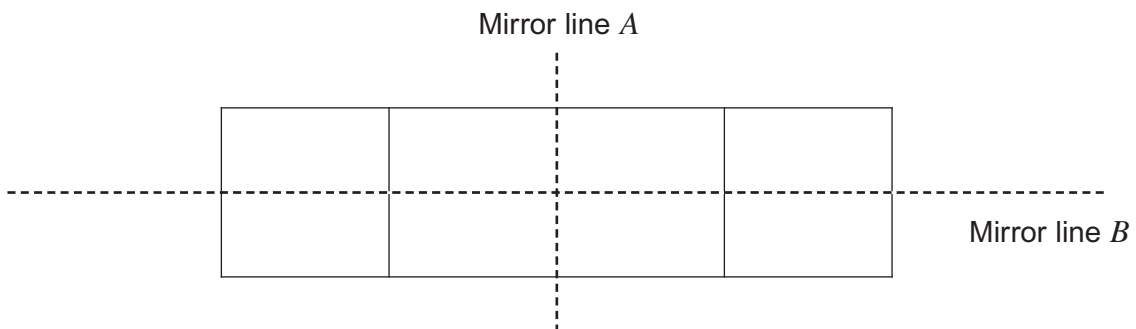
9 Clare has divided her garden into 8 equal sections.
She wants to plant flowers in each section so that the colours are symmetrical.

9 (a) Complete this diagram so that
4 sections are red (R)
4 sections are blue (B)
the colours have symmetry about mirror line *A*.



(2 marks)

9 (b) Fill in this diagram so that
4 sections are red (R)
4 sections are blue (B)
the colours have symmetry about **both** mirror lines, *A* and *B*.



(3 marks)



10 12 litres of a drink is made by mixing water with 3 litres of orange juice.

What fraction of the drink is water?
Give your answer in its simplest form.

.....
.....

Answer (2 marks)

11 Complete the formula for each of the following.

The area, A (cm^2), of a square of side x (cm) is $A = \dots\dots\dots$

The volume, V (cm^3), of a cube of side y (cm) is $V = \dots\dots\dots$


(2 marks)

Turn over for the next question



12

length = 8 cm

Not drawn
accurately

width = 4 cm

Tick whether each statement is **true** or **false** for this rectangle.

	True	False
The length is 4 times the width	<input type="checkbox"/>	<input type="checkbox"/>
The area is 32 cm^2	<input type="checkbox"/>	<input type="checkbox"/>
The perimeter is 32 cm	<input type="checkbox"/>	<input type="checkbox"/>
It has rotational symmetry of order 4	<input type="checkbox"/>	<input type="checkbox"/>
The width is 50% of the length	<input type="checkbox"/>	<input type="checkbox"/>
The ratio of length : width is 2 : 1	<input type="checkbox"/>	<input type="checkbox"/>

(6 marks)

13 (a) Solve $8x = 32$

.....

$x =$ (1 mark)

13 (b) Solve $y - 9 = 14$

.....

$y =$ (1 mark)

13 (c) Solve $\frac{w}{3} = 7$

.....

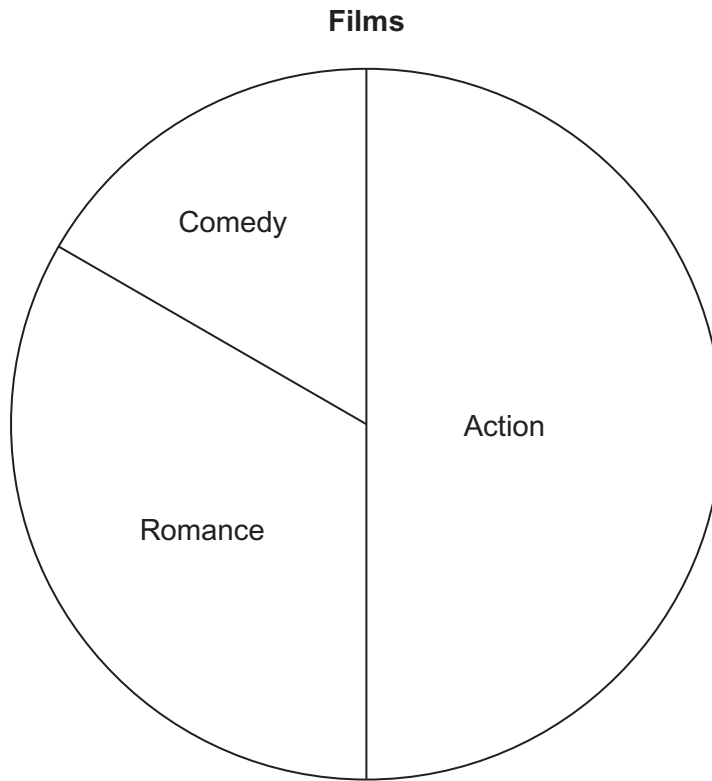
$w =$ (1 mark)

Turn over for the next question



14 You will need a protractor to answer this question.

The pie chart shows the types of film showing at a multiplex cinema.



There are 3 comedy films.

14 (a) How many films are showing altogether?

.....

.....

Answer (3 marks)

14 (b) How many **more** romance films are showing than comedy films?

.....

.....

Answer (2 marks)



***15** Here are two adverts for the same type of bread.

800 gram loaf

Normal price £1.36

Buy one
get a second loaf
half price

400 gram loaf

Normal price 92p

Buy one
get one free

Which is cheaper, two 800 gram loaves or four 400 gram loaves?
You **must** show your working.

.....

.....

.....

.....

.....

.....

.....

.....

.....

Answer (5 marks)

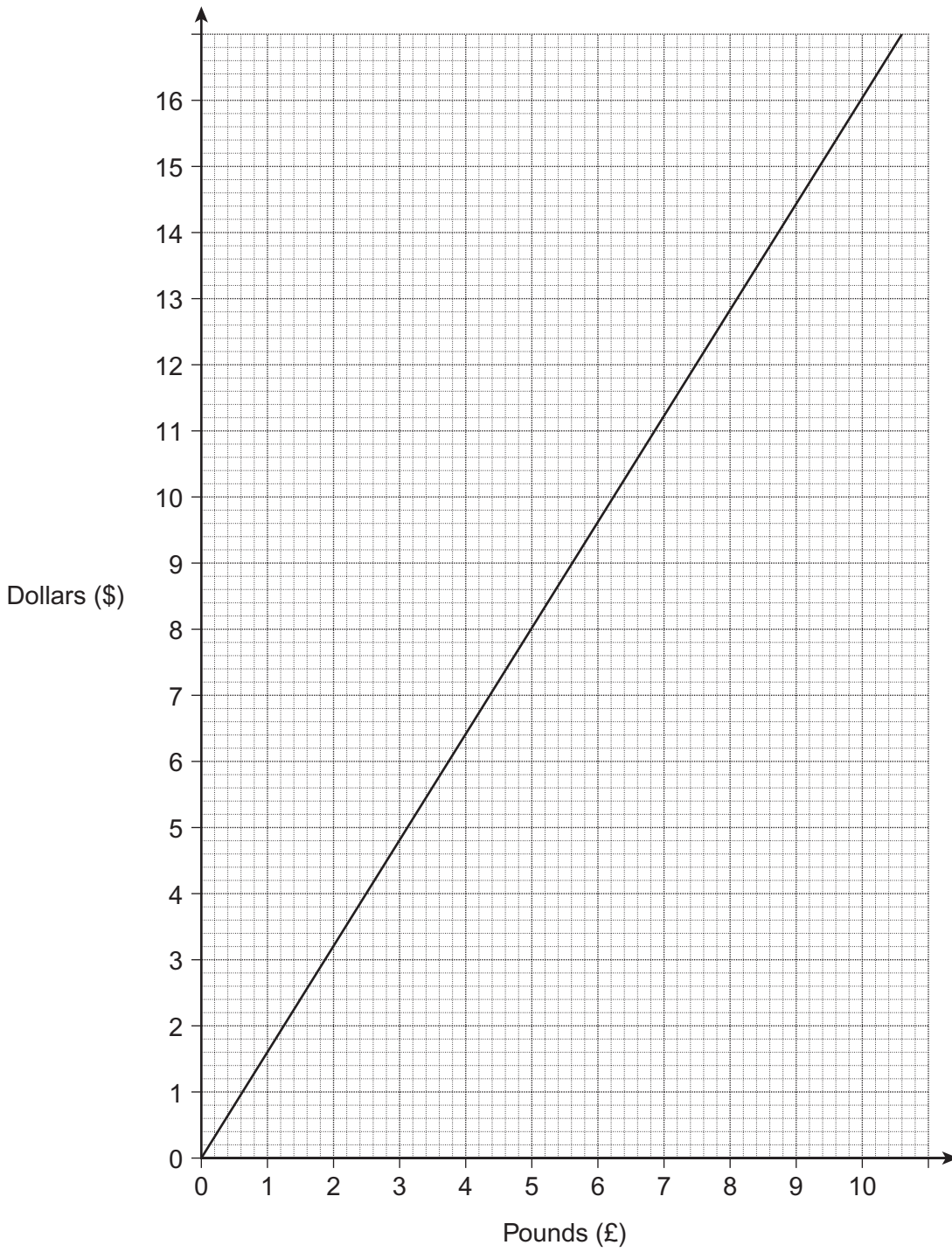
10

Turn over ►



16

Conversion graph for dollars and pounds



16 (a) Use the graph to convert £5 into dollars (\$).

Answer \$ (1 mark)

16 (b) Lucy is going to the USA on holiday.
She converts £500 into dollars (\$) at the rate shown by the graph.

How much does she get in dollars (\$)?

.....
.....
.....

Answer \$ (2 marks)

***16 (c)** After the holiday the exchange rate is £1 = \$1.75
She converts \$150 back into pounds (£).

How much does she get back?

.....
.....
.....

Answer £ (3 marks)



17 Use your calculator to work out each of the following.

17 (a) $\sqrt{334.89}$

Answer (1 mark)


17 (b) $(7.2 - 5.3) \times (1.6 + 2.8)$

Answer (1 mark)

17 (c) $\frac{1}{2} \times (3.64 \div 2.8)$

Answer (1 mark)

18 Shade **three** squares so that the shape has rotational symmetry of order 2.



(2 marks)



19 The following letter cards are put in a bag.



A card is picked at random.

19 (a) Write down the probability that it has the letter L on it.

Answer (2 marks)

19 (b) Write down the probability that it does **not** have the letter P on it.

.....

Answer (2 marks)

Turn over for the next question

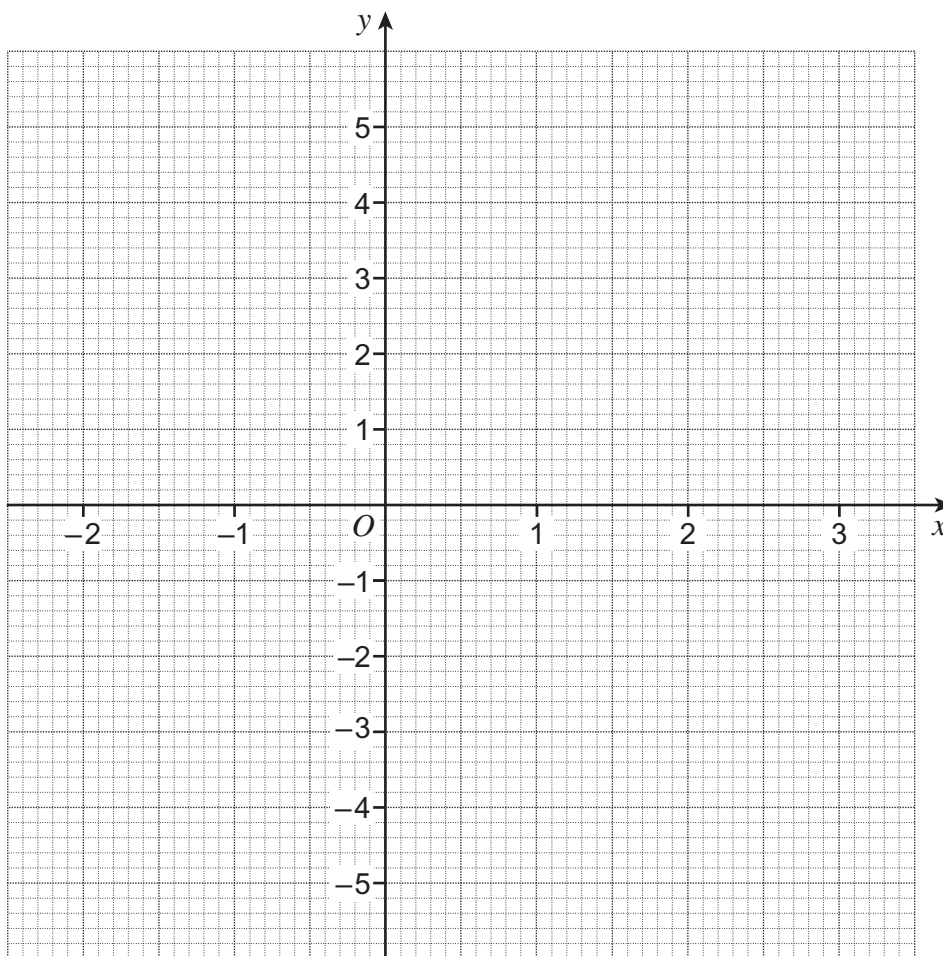


20 (a) Complete the table of values for $y = 2x - 1$

x	-2	-1	0	1	2	3
y	-5	-3		1		5

(2 marks)

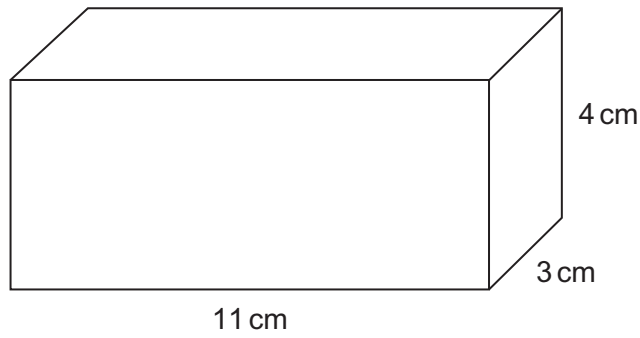
20 (b) Draw the graph of $y = 2x - 1$ for values of x from -2 to 3.



(2 marks)



21 Work out the volume of the cuboid.



.....

.....

.....

.....

Answer cm³ (2 marks)

22 Solve $3(2x + 4) + 8 = 50$

.....

.....

.....

.....

.....

$x =$ (4 marks)



23 Here are Jon's marks in two tests.

Test A 18 out of 25

Test B 30 out of 40

Which test gives the higher percentage mark?
You **must** show your working.

.....

.....

.....

.....

.....

.....

Answer (3 marks)

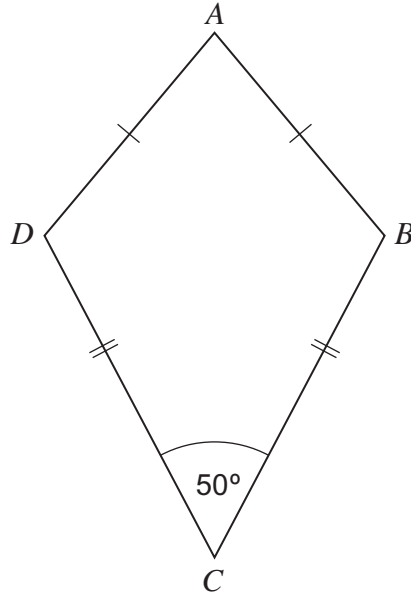


24

The diagram shows a kite.

Angle $C = 50^\circ$

Angle A is half of angle B .



Not drawn
accurately

Work out the size of angle A .

.....

.....

.....

.....

.....

.....

.....

.....

.....

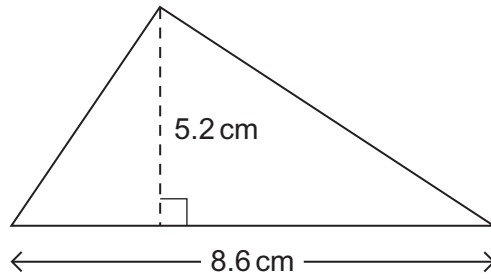
Answer degrees (4 marks)

7

Turn over ►



25 Work out the area of the triangle.



Not drawn
accurately

Give your answer to 1 decimal place.

.....

.....

.....

.....

Answer cm² (3 marks)

26 Show that the equation $x^3 + 8x = 30$ has a solution between $x = 2.2$ and $x = 2.3$

.....

.....

.....

.....

(2 marks)



27 Mark went fishing on four Saturdays.

	Week 1	Week 2	Week 3	Week 4
Number of fish caught	4	1	6	3
Time fishing	2.5 hours	1.5 hours	5 hours	2.5 hours
Mean weight of fish caught	1.2 kg	2.3 kg	0.8 kg	1.9 kg

27 (a) Work out the **mean** number of fish caught **per hour** in **Week 1**.

.....

.....

Answer (2 marks)

*27 (b) Mark says,
"One of the fish I caught weighed 5 kg."

In which week did this happen?
Give a reason for your answer.

.....

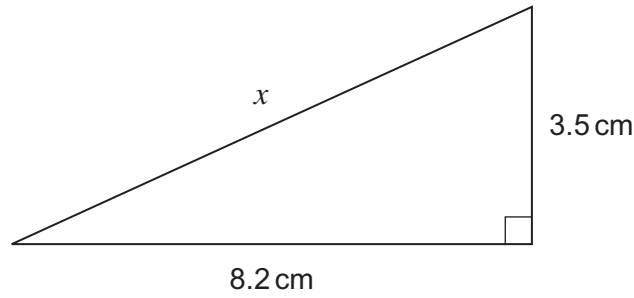
.....

.....

Answer (2 marks)



28 Work out the length x .



Not drawn
accurately

.....

.....

.....

.....

Answer cm (3 marks)

29 These expressions represent three numbers.

x $x + 3$ $4x$

Work out the mean in terms of x .
Give your answer in its simplest form.

.....

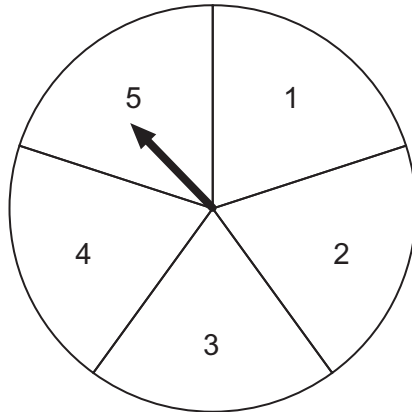
.....

.....

Answer (3 marks)



30 Matt made this spinner. He spins the arrow 200 times.



30 (a) How many times would you expect the arrow to stop on the number 5 if the spinner is fair?

.....

.....

Answer (2 marks)

30 (b) The table shows the number of times the arrow stops on each number.

Stops on	1	2	3	4	5
Number of times	32	41	65	27	35

Do you think the spinner is fair? Give a reason for your answer.

.....

.....

.....

.....

(2 marks)

END OF QUESTIONS



There are no questions printed on this page

**DO NOT WRITE ON THIS PAGE
ANSWER IN THE SPACES PROVIDED**

